



MAA

MATHEMATICAL ASSOCIATION OF AMERICA

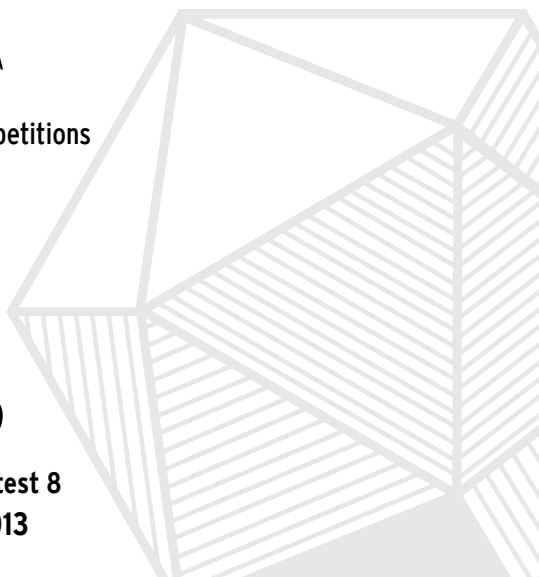
American Mathematics Competitions

29th Annual

AMC 8

American Mathematics Contest 8

Tuesday, November 19, 2013



INSTRUCTIONS

1. DO NOT OPEN THIS BOOKLET UNTIL YOUR PROCTOR TELLS YOU.
2. This is a twenty-five question multiple choice test. For each question, only one answer choice is correct.
3. Mark your answer to each problem on the AMC 8 Answer Form with a #2 pencil. Check the blackened circles for accuracy and erase errors and stray marks completely. Only answers properly marked on the answer form will be graded.
4. There is no penalty for guessing. Your score is the number of correct answers.
5. Only scratch paper, graph paper, rulers, protractors, and erasers are allowed as aids. Calculators are NOT allowed. No problems on the test *require* the use of a calculator.
6. Figures are not necessarily drawn to scale.
7. Before beginning the test, your proctor will ask you to record your information on the answer form.
8. You will have 40 minutes to complete the test once your proctor tells you to begin.
9. When you finish the exam, *sign your name* in the space provided on the answer form.

The Committee on the American Mathematics Competitions reserves the right to re-examine students before deciding whether to grant official status to their scores. The Committee also reserves the right to disqualify all scores from a school if it determines that the required security procedures were not followed.

The publication, reproduction or communication of the problems or solutions of the AMC 8 during the period when students are eligible to participate seriously jeopardizes the integrity of the results. Dissemination via copier, telephone, email, internet or media of any type during this period is a violation of the competition rules. After the contest period, permission to make copies of individual problems in paper or electronic form including posting on web pages for educational use is granted without fee provided that copies are not made or distributed for profit or commercial advantage and that copies bear the copyright notice.

2013
AMC 8



DO NOT OPEN UNTIL TUESDAY, NOVEMBER 19, 2013

****ADMINISTRATION ON AN EARLIER DATE
WILL DISQUALIFY YOUR SCHOOL'S RESULTS****

1. PLEASE READ THE TEACHERS' MANUAL BEFORE NOVEMBER 19, 2013. All rules and instructions needed to administer this exam are contained in the manual. You will not need anything from inside this package until November 19.
2. Your PRINCIPAL or VICE-PRINCIPAL must verify on the AMC 8 CERTIFICATION FORM that you followed all rules associated with the conduct of the exam.
3. The Answer Forms must be sent by trackable mail to the AMC office no later than 24 hours following the exam.
4. THE AMC 8 IS TO BE ADMINISTERED DURING A CONVENIENT 40 MINUTE PERIOD. THE EXAM MAY BE GIVEN DURING A REGULAR MATH CLASS.
5. The publication, reproduction or communication of the problems or solutions of this test during the period when students are eligible to participate seriously jeopardizes the integrity of the results. Dissemination via copier, telephone, email, internet or media of any type during this period is a violation of the competition rules.

The American Mathematics Competitions

are Sponsored by

The Mathematical Association of America - MAA www.maa.org
The Akamai Foundation www.akamai.com

Contributors

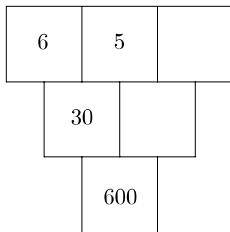
Academy of Applied Sciences - AAS www.aas-world.org
American Mathematical Association of Two-Year Colleges - AMATYC www.amatyc.org
American Mathematical Society - AMS www.ams.org
American Statistical Association - ASA www.amstat.org
Art of Problem Solving - AoPS www.artofproblemsolving.com
Awesome Math www.awesomemath.org
Casualty Actuarial Society - CAS www.casact.org
D.E. Shaw & Co. www.deshaw.com
Delta Airlines www.delta.com
Jane Street Capital www.janestreet.com
Math For America www.mathforamerica.org
Mu Alpha Theta - MAT www.mualphatheta.org
National Council of Teachers of Mathematics - NCTM www.nctm.org
Pi Mu Epsilon - PME www.pme-math.org
Society for Industrial and Applied Math (SIAM) www.siam.org

1. Danica wants to arrange her model cars in rows with exactly 6 cars in each row. She now has 23 model cars. What is the smallest number of additional cars she must buy in order to be able to arrange her cars in this way?
(A) 1 (B) 2 (C) 3 (D) 4 (E) 5
2. A sign at the fish market says, “50% off, today only: half-pound packages for just \$3 per package.” What is the regular price for a full pound of fish, in dollars?
(A) 6 (B) 9 (C) 10 (D) 12 (E) 15
3. What is the value of $4 \cdot (-1 + 2 - 3 + 4 - 5 + 6 - 7 + \cdots + 1000)$?
(A) -10 (B) 0 (C) 1 (D) 500 (E) 2000
4. Eight friends ate at a restaurant and agreed to share the bill equally. Because Judi forgot her money, each of her seven friends paid an extra \$2.50 to cover her portion of the total bill. What was the total bill?
(A) \$120 (B) \$128 (C) \$140 (D) \$144 (E) \$160



5. Hammie is in the 6th grade and weighs 106 pounds. His quadruplet sisters are tiny babies and weigh 5, 5, 6, and 8 pounds. Which is greater, the average (mean) weight of these five children or the median weight, and by how many pounds?
(A) median, by 60 (B) median, by 20 (C) average, by 5
(D) average, by 15 (E) average, by 20

6. The number in each box below is the product of the numbers in the two boxes that touch it in the row above. For example, $30 = 6 \times 5$. What is the missing number in the top row?



- (A) 2 (B) 3 (C) 4 (D) 5 (E) 6
7. Trey and his mom stopped at a railroad crossing to let a train pass. As the train began to pass, Trey counted 6 cars in the first 10 seconds. It took the train 2 minutes and 45 seconds to clear the crossing at a constant speed. Which of the following was the most likely number of cars in the train?



- (A) 60 (B) 80 (C) 100 (D) 120 (E) 140
8. A fair coin is tossed 3 times. What is the probability of at least two consecutive heads?
- (A) $\frac{1}{8}$ (B) $\frac{1}{4}$ (C) $\frac{3}{8}$ (D) $\frac{1}{2}$ (E) $\frac{3}{4}$
9. The Incredible Hulk can double the distance he jumps with each succeeding jump. If his first jump is 1 meter, the second jump is 2 meters, the third jump is 4 meters, and so on, then on which jump will he first be able to jump more than 1 kilometer?
- (A) 9th (B) 10th (C) 11th (D) 12th (E) 13th
10. What is the ratio of the least common multiple of 180 and 594 to the greatest common factor of 180 and 594?
- (A) 110 (B) 165 (C) 330 (D) 625 (E) 660

11. Ted's grandfather used his treadmill on 3 days this week. He went 2 miles each day. On Monday he jogged at a speed of 5 miles per hour. He walked at the rate of 3 miles per hour on Wednesday and at 4 miles per hour on Friday. If Grandfather had always walked at 4 miles per hour, he would have spent less time on the treadmill. How many minutes less?
- (A) 1 (B) 2 (C) 3 (D) 4 (E) 5



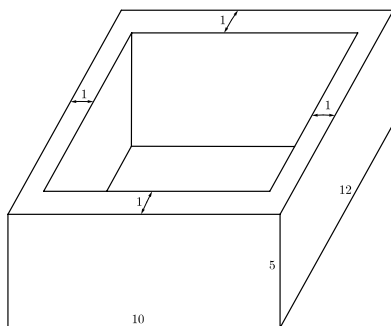
12. At the 2013 Winnebago County Fair a vendor is offering a “fair special” on sandals. If you buy one pair of sandals at the regular price of \$50, you get a second pair at a 40% discount, and a third pair at half the regular price. Javier took advantage of the “fair special” to buy three pairs of sandals. What percentage of the \$150 regular price did he save?
- (A) 25 (B) 30 (C) 33 (D) 40 (E) 45



13. When Clara totaled her scores, she inadvertently reversed the units digit and the tens digit of one score. By which of the following might her incorrect sum have differed from the correct one?
- (A) 45 (B) 46 (C) 47 (D) 48 (E) 49
14. Abe holds 1 green and 1 red jelly bean in his hand. Bea holds 1 green, 1 yellow, and 2 red jelly beans in her hand. Each randomly picks a jelly bean to show the other. What is the probability that the colors match?
- (A) $\frac{1}{4}$ (B) $\frac{1}{3}$ (C) $\frac{3}{8}$ (D) $\frac{1}{2}$ (E) $\frac{2}{3}$



15. If $3^p + 3^4 = 90$, $2^r + 44 = 76$, and $5^3 + 6^s = 1421$, what is the product of p , r , and s ?
- (A) 27 (B) 40 (C) 50 (D) 70 (E) 90
16. A number of students from Fibonacci Middle School are taking part in a community service project. The ratio of 8th-graders to 6th-graders is 5 : 3, and the ratio of 8th-graders to 7th-graders is 8 : 5. What is the smallest number of students that could be participating in the project?
- (A) 16 (B) 40 (C) 55 (D) 79 (E) 89
17. The sum of six consecutive positive integers is 2013. What is the largest of these six integers?
- (A) 335 (B) 338 (C) 340 (D) 345 (E) 350
18. Isabella uses one-foot cubical blocks to build a rectangular fort that is 12 feet long, 10 feet wide, and 5 feet high. The floor and the four walls are all one foot thick. How many blocks does the fort contain?

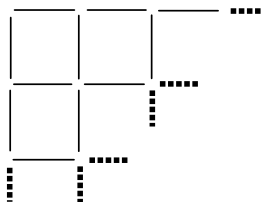


- (A) 204 (B) 280 (C) 320 (D) 340 (E) 600
19. Bridget, Cassie, and Hannah are discussing the results of their last math test. Hannah shows Bridget and Cassie her test, but Bridget and Cassie don't show their tests to anyone. Cassie says, "I didn't get the lowest score in our class," and Bridget adds, "I didn't get the highest score." What is the ranking of the three girls from highest to lowest?
- (A) Hannah, Cassie, Bridget (B) Hannah, Bridget, Cassie
 (C) Cassie, Bridget, Hannah (D) Cassie, Hannah, Bridget
 (E) Bridget, Cassie, Hannah

20. A 1×2 rectangle is inscribed in a semicircle with the longer side on the diameter. What is the area of the semicircle?
- (A) $\frac{\pi}{2}$ (B) $\frac{2\pi}{3}$ (C) π (D) $\frac{4\pi}{3}$ (E) $\frac{5\pi}{3}$
21. Samantha lives 2 blocks west and 1 block south of the southwest corner of City Park. Her school is 2 blocks east and 2 blocks north of the northeast corner of City Park. On school days she bikes on streets to the southwest corner of City Park, then takes a diagonal path through the park to the northeast corner of City Park, and then bikes on streets to school. If her route is as short as possible, how many different routes can she take?
- (A) 3 (B) 6 (C) 9 (D) 12 (E) 18

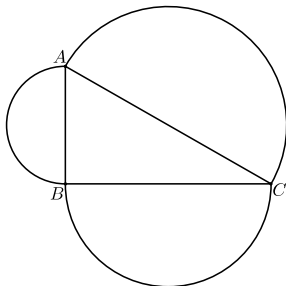


22. Toothpicks are used to make a grid that is 60 toothpicks long and 32 toothpicks high. How many toothpicks are used altogether?

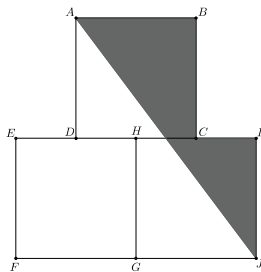


- (A) 1920 (B) 1952 (C) 1980 (D) 2013 (E) 3932

23. Angle ABC of $\triangle ABC$ is a right angle. The sides of $\triangle ABC$ are the diameters of semicircles as shown. The area of the semicircle on \overline{AB} equals 8π , and the arc of the semicircle on \overline{AC} has length 8.5π . What is the radius of the semicircle on \overline{BC} ?

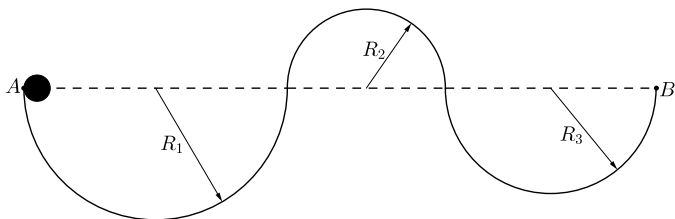


- (A) 7 (B) 7.5 (C) 8 (D) 8.5 (E) 9
24. Squares $ABCD$, $EFGH$, and $GHIJ$ are equal in area. Points C and D are the midpoints of sides IH and HE , respectively. What is the ratio of the area of the shaded pentagon $AJICB$ to the sum of the areas of the three squares?



- (A) $\frac{1}{4}$ (B) $\frac{7}{24}$ (C) $\frac{1}{3}$ (D) $\frac{3}{8}$ (E) $\frac{5}{12}$

25. A ball with diameter 4 inches starts at point A to roll along the track shown. The track is comprised of 3 semicircular arcs whose radii are $R_1 = 100$ inches, $R_2 = 60$ inches, and $R_3 = 80$ inches, respectively. The ball always remains in contact with the track and does not slip. What is the distance in inches the center of the ball travels over the course from A to B ?



- (A) 238π (B) 240π (C) 260π (D) 280π (E) 500π



SOLUTIONS

Your School Manager will be sent at least one copy of the 2013 AMC 8 Solutions Pamphlet with the report. It is meant to be loaned to students (but not duplicated).

WRITE TO US

Comments about the problems and solutions for this AMC 8 should be addressed to:

Dr. Margie Raub Hunt, AMC 8 Chair
2169 Madero Dr., The Villages, FL 32159

Comments about administrative arrangements should be addressed to:

MAA American Mathematics Competitions / amcinfo@maa.org
American Mathematics Competitions, University of Nebraska-Lincoln
P.O. Box 880658, Lincoln, NE 68588-0658

AMC 10 & AMC 12

The AMC 10 and AMC 12 are 25-question, 75-minute, multiple choice contests. All schools participating in the AMC 8 receive a brochure and registration form for the 2014

AMC 10. Schools with high scoring students on the AMC 8 should consider administering the AMC 10. The best way to prepare for these contests is to study exams from previous years. Orders for all publications listed below should be addressed to:

American Mathematics Competitions

ATTN: Publications

1740 Vine Street

Lincoln, NE 68508-1228

PUBLICATIONS

A complete listing of the current publications for sale can be found on our web site:
amc.maa.org